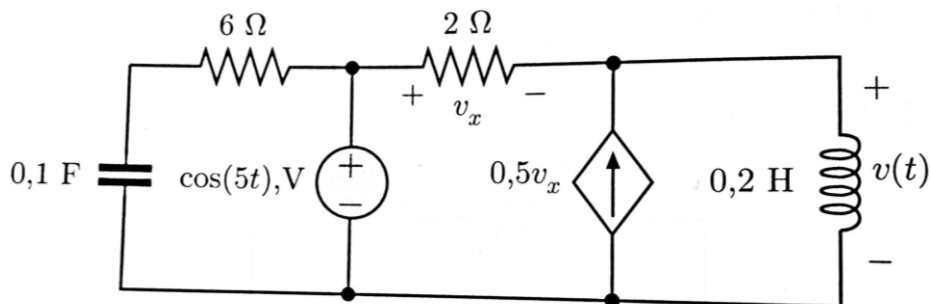
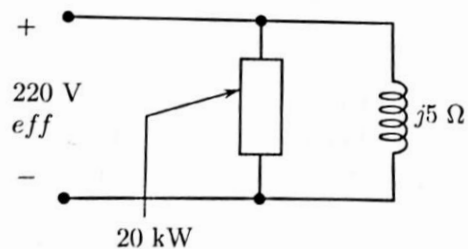


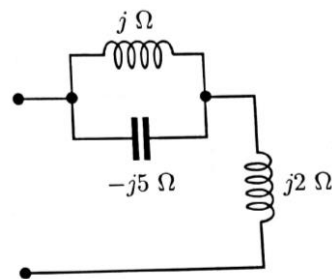
Nel circuito in figura ricavare la $v(t)$.



Determinare il fattore di potenza dei bipoli riportati in figura (a) e (b)



(a)



(b)

Nel circuito in figura ricavate la v_o

